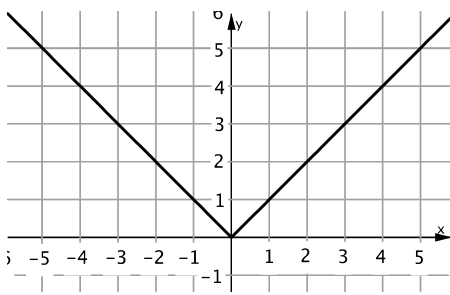
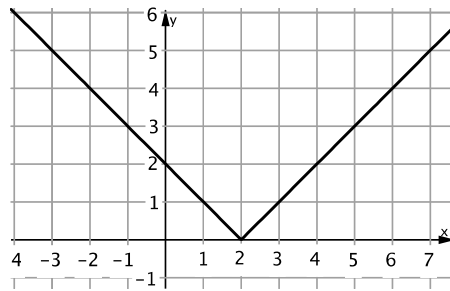


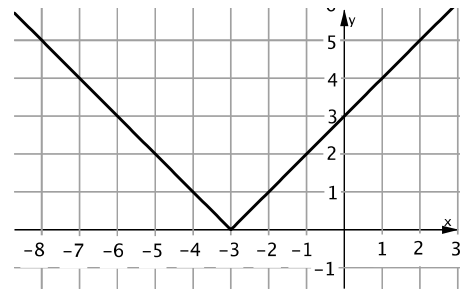
M_10_L_15 | Betragsfunktion



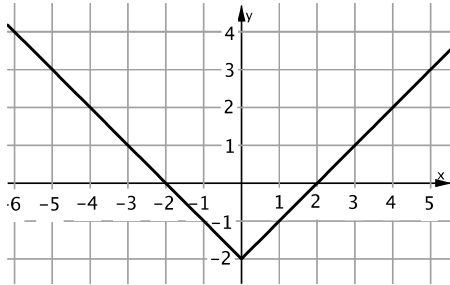
M_10_L_15 | Betragsfunktion



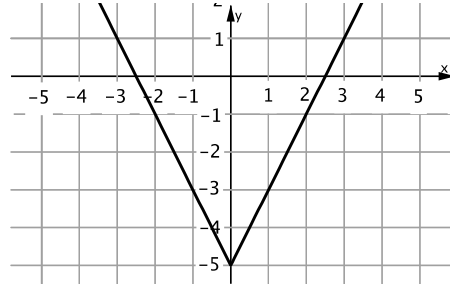
M_10_L_15 | Betragsfunktion



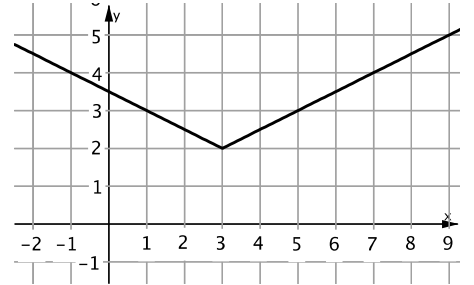
M_10_L_15 | Betragsfunktion



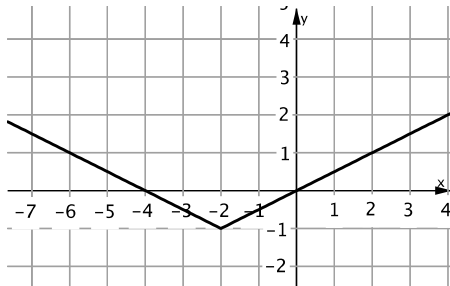
M_10_L_15 | Betragsfunktion



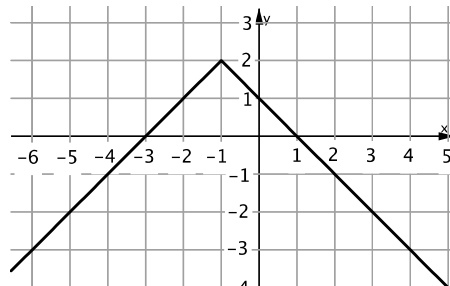
M_10_L_15 | Betragsfunktion



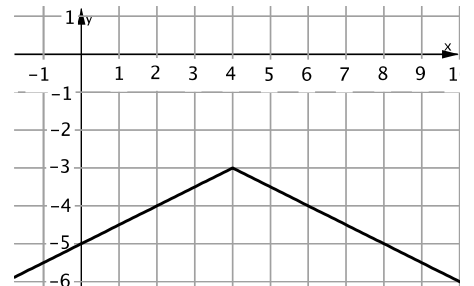
M_10_L_15 | Betragsfunktion



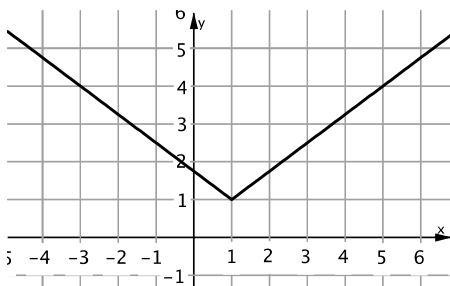
M_10_L_15 | Betragsfunktion



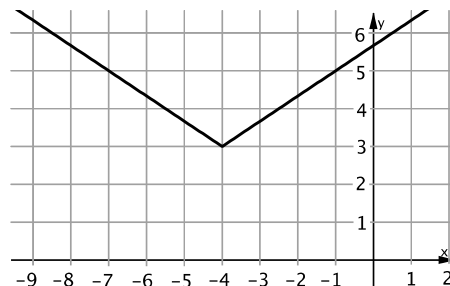
M_10_L_15 | Betragsfunktion



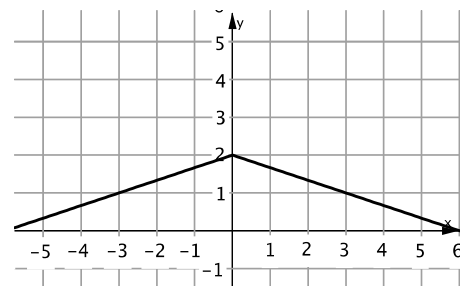
M_10_L_15 | Betragsfunktion



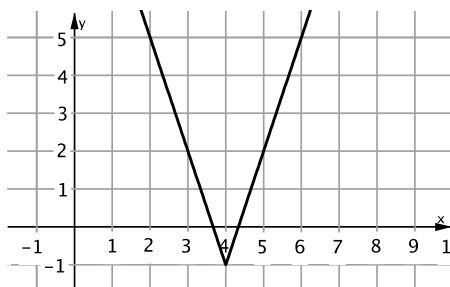
M_10_L_15 | Betragsfunktion



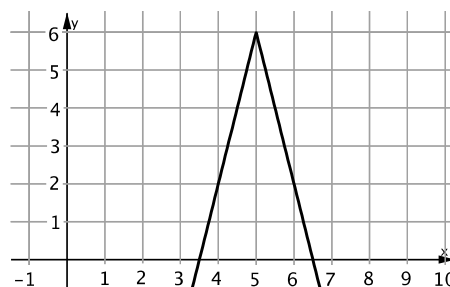
M_10_L_15 | Betragsfunktion



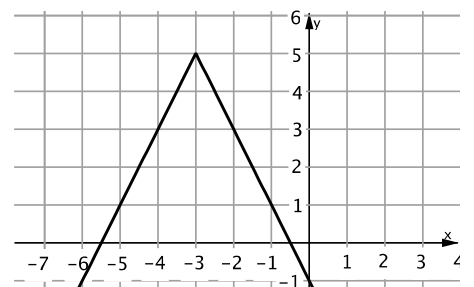
M_10_L_15 | Betragsfunktion



M_10_L_15 | Betragsfunktion



M_10_L_15 | Betragsfunktion



$$f(x) = |x+3|$$

03

$$f(x) = |x-2|$$

02

$$f(x) = |x|$$

01

$$f(x) = \frac{1}{2}|x-3|+2$$

06

$$f(x) = 2|x|-5$$

05

$$f(x) = |x|-2$$

04

$$f(x) = -\frac{1}{2}|x-4|-3$$

09

$$f(x) = -|x+1|+2$$

08

$$f(x) = \frac{1}{2}|x+2|-1$$

07

$$f(x) = -\frac{1}{3}|x|+2$$

12

$$f(x) = \frac{2}{3}|x+4|+3$$

11

$$f(x) = \frac{3}{4}|x-1|+1$$

10

$$f(x) = -2|x+3|+5$$

15

$$f(x) = -4|x-5|+6$$

14

$$f(x) = 3|x-4|-1$$

13