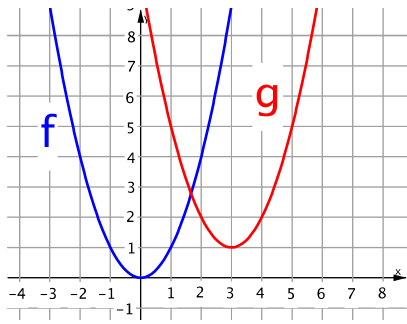
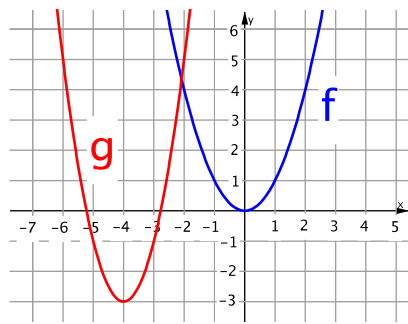


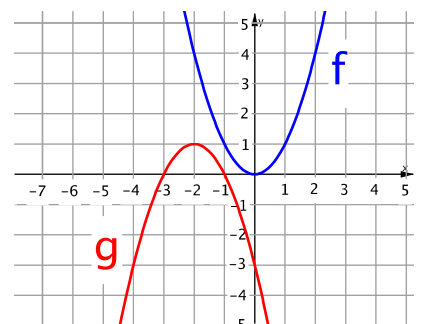
M_10_L_14 | Verschieben u. Strecken - Mix



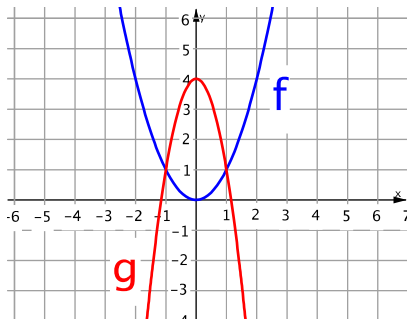
M_10_L_14 | Verschieben u. Strecken - Mix



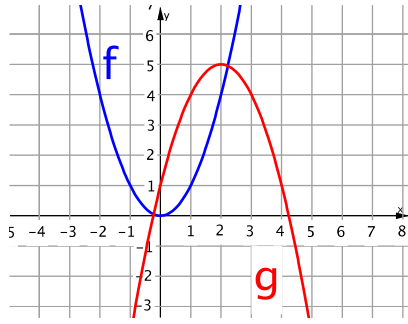
M_10_L_14 | Verschieben u. Strecken - Mix



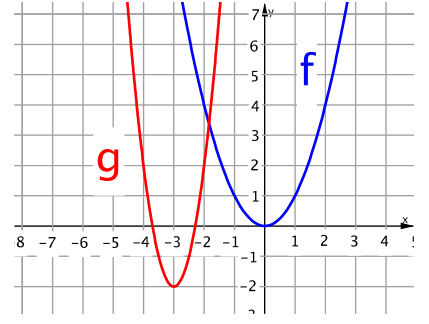
M_10_L_14 | Verschieben u. Strecken - Mix



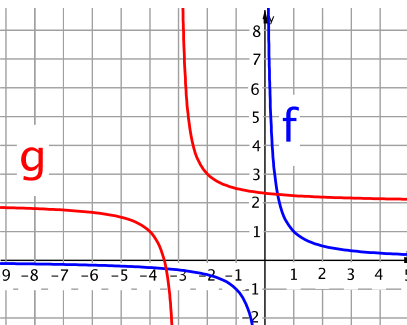
M_10_L_14 | Verschieben u. Strecken - Mix



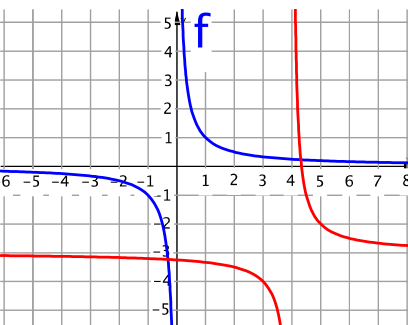
M_10_L_14 | Verschieben u. Strecken - Mix



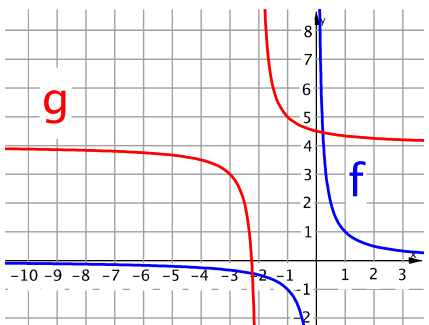
M_10_L_14 | Verschieben u. Strecken - Mix



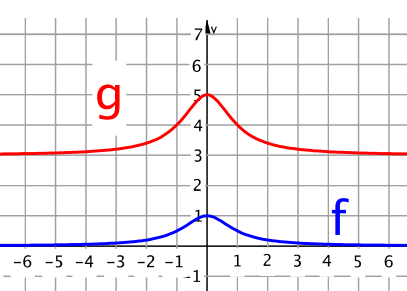
M_10_L_14 | Verschieben u. Strecken - Mix



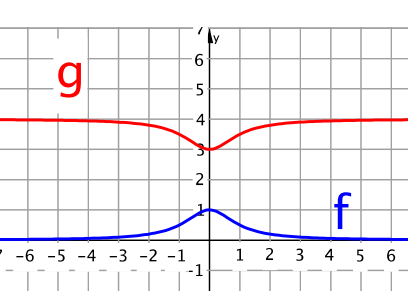
M_10_L_14 | Verschieben u. Strecken - Mix



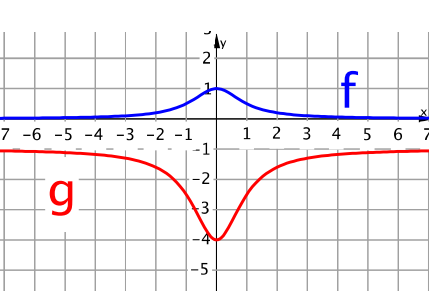
M_10_L_14 | Verschieben u. Strecken - Mix



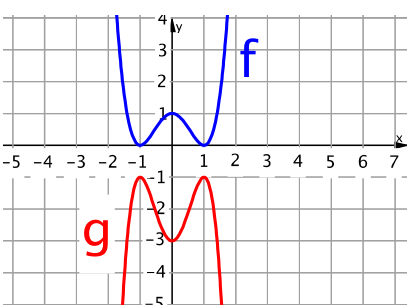
M_10_L_14 | Verschieben u. Strecken - Mix



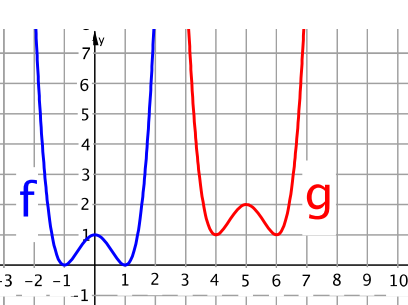
M_10_L_14 | Verschieben u. Strecken - Mix



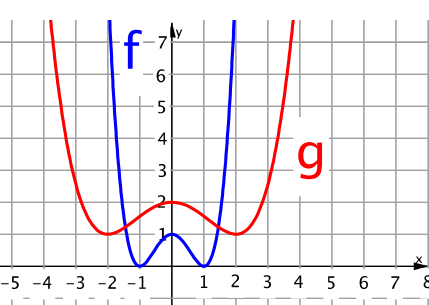
M_10_L_14 | Verschieben u. Strecken - Mix



M_10_L_14 | Verschieben u. Strecken - Mix



M_10_L_14 | Verschieben u. Strecken - Mix



$$g(x) = -f(x+2) + 1$$

03

$$g(x) = 2 \cdot f(x+4) - 3$$

02

$$g(x) = f(x-3) + 1$$

01

$$g(x) = 4 \cdot f(x+3) - 2$$

06

$$g(x) = -f(x-2) + 5$$

05

$$g(x) = -3 \cdot f(x) + 4$$

04

$$g(x) = f(x+2) + 4$$

09

$$g(x) = f(x-4) - 3$$

08

$$g(x) = f(x+3) + 2$$

07

$$g(x) = -3 \cdot f(x) - 1$$

12

$$g(x) = -f(x) + 4$$

11

$$g(x) = 2 \cdot f(x) + 3$$

10

$$g(x) = f(0,5x) + 1$$

15

$$g(x) = f(x-5) + 1$$

14

$$g(x) = -2 \cdot f(x) - 1$$

13