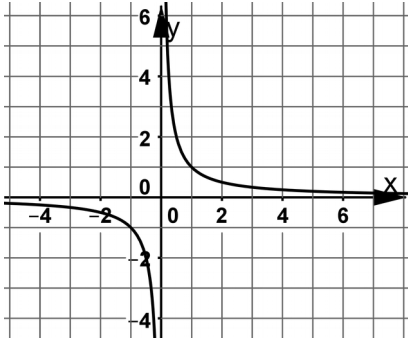
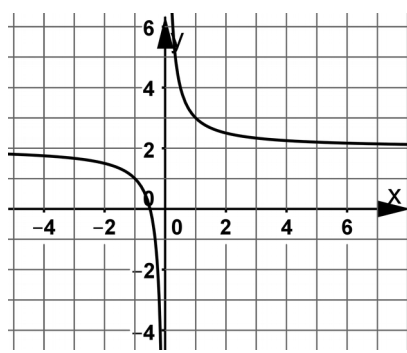


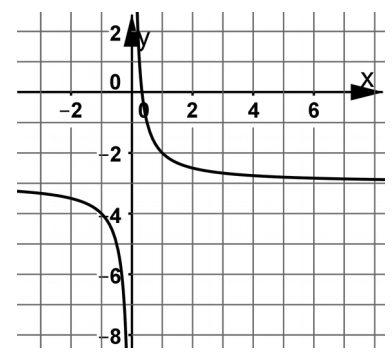
M_10_L_10 | Hyperbeln



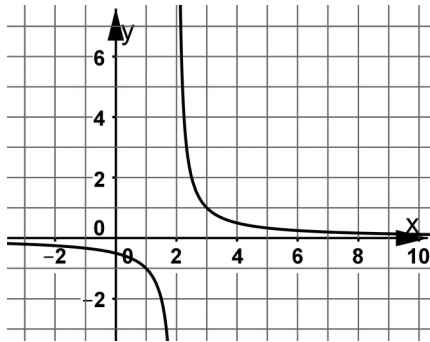
M_10_L_10 | Hyperbeln



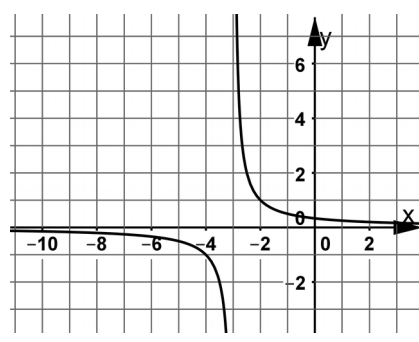
M_10_L_10 | Hyperbeln



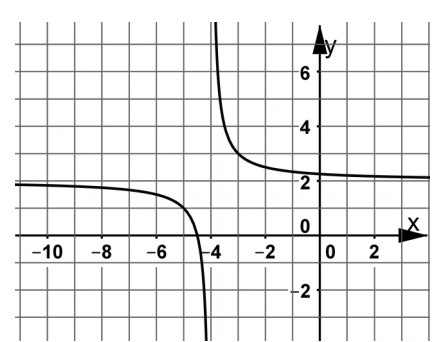
M_10_L_10 | Hyperbeln



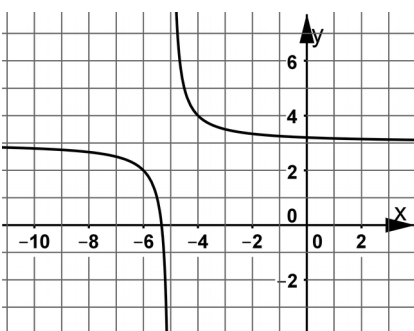
M_10_L_10 | Hyperbeln



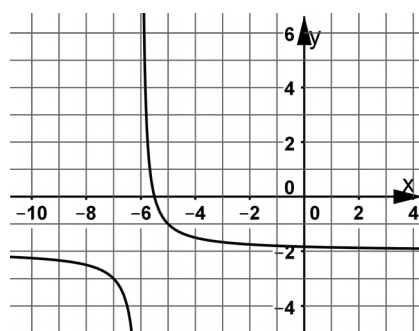
M_10_L_10 | Hyperbeln



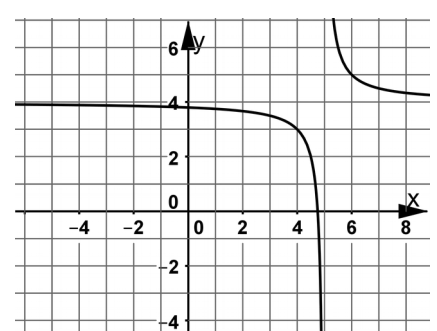
M_10_L_10 | Hyperbeln



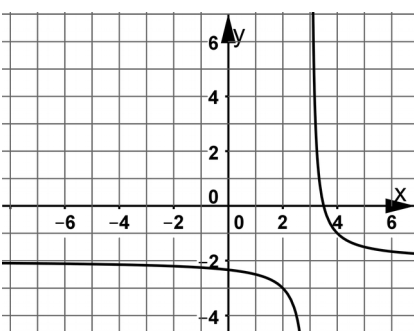
M_10_L_10 | Hyperbeln



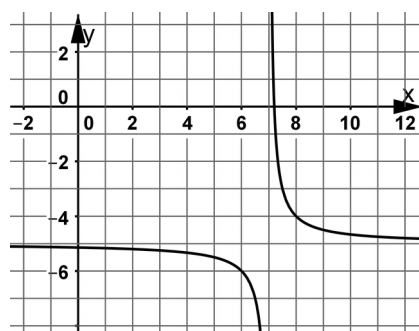
M_10_L_10 | Hyperbeln



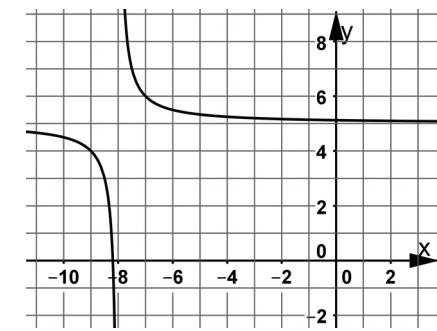
M_10_L_10 | Hyperbeln



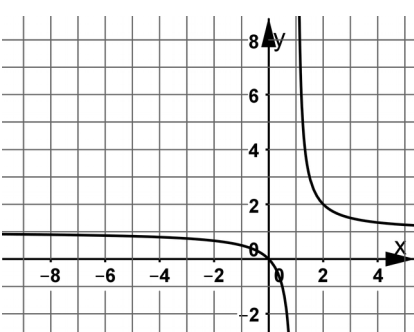
M_10_L_10 | Hyperbeln



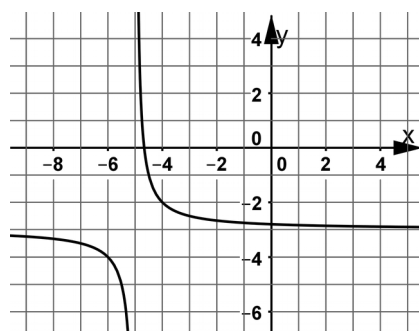
M_10_L_10 | Hyperbeln



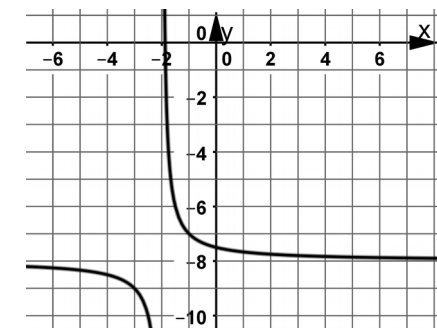
M_10_L_10 | Hyperbeln



M_10_L_10 | Hyperbeln



M_10_L_10 | Hyperbeln



$$f(x) = \frac{1}{x} - 3$$

03

$$f(x) = \frac{1}{x} + 2$$

02

$$f(x) = \frac{1}{x}$$

01

$$f(x) = \frac{1}{x+4} + 2$$

06

$$f(x) = \frac{1}{x+3}$$

05

$$f(x) = \frac{1}{x-2}$$

04

$$f(x) = \frac{1}{x-5} + 4$$

09

$$f(x) = \frac{1}{x+6} - 2$$

08

$$f(x) = \frac{1}{x+5} + 3$$

07

$$f(x) = \frac{1}{x+8} + 5$$

12

$$f(x) = \frac{1}{x-7} - 5$$

11

$$f(x) = \frac{1}{x-3} - 2$$

10

$$f(x) = \frac{1}{x+2} - 8$$

15

$$f(x) = \frac{1}{x+5} - 3$$

14

$$f(x) = \frac{1}{x-1} + 1$$

13